
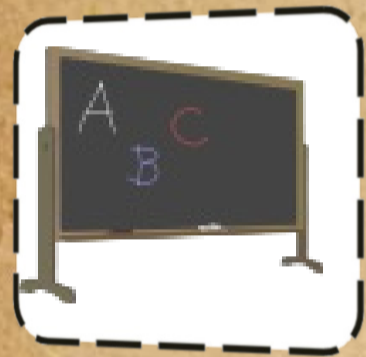





Measure the vertical length of a computer monitor on the first floor.




How wide is the handrail next to the stairs on the third floor? Horizontally.



What is the vertical length of the small blackboard in the classroom next to the Jump classroom?



What is the horizontal length of the "ART" sign on the first floor?




Measure the height of Teacher Leah's desk, the black part. Vertical.



What is the vertical length of the "Respect Others" sign near the bathroom on the third floor?




The horizontal length of the large window next to the Giraffe door on the second floor.



How wide is a locker door on the second floor?



The vertical length of your "Math Connects" book.



The Horizontal length of the Halloween picture with: Teachers, Bruno, Brandon, Lulu, Joy.

